

Answer all questions.



SPECIMEN

To be taken only between ... and ... 2013

LEVEL 1 CAMBRIDGE AWARD IN MATHEMATICS

0000/00: Calculate with money without a calculator




Candidates answer on the Question Paper

OCR Supplied Materials:

- None

Other Materials Required:

- None



Duration: 15 minutes

Candidate Forename	Candidate Surname
--------------------	-------------------

Centre Number						Candidate Number				
---------------	--	--	--	--	--	------------------	--	--	--	--

INSTRUCTIONS TO EXAMS OFFICER/INVIGILATOR


- Candidates may use paper to make notes during the assessment, but these notes should not be submitted to OCR with this answer booklet. Any notes submitted to OCR will not be marked.

INSTRUCTIONS TO CANDIDATES

- Write your name, centre number and candidate number in the boxes above. Please write clearly and in capital letters.
- Use black ink. HB Pencil may be used for graphs and diagrams only.
- Answer all the questions.
- Read each question carefully. Make sure you know what you have to do before starting your answer.
- Write your answer to each question in the space provided. Additional paper may be used if necessary but you must clearly show your candidate number, centre number and question number(s).
- Do not write in bar codes.

INFORMATION FOR CANDIDATES

- The number of marks for each question is given in brackets [] at the end of the question or part question.
- The total number of marks for this paper is 8.
- This document consists of 8 pages. Any blank pages are indicated.



For Examiner's Use	
Total	

This paper has been premodified for carrier language

© OCR 2012 [.....]

OCR is an exempt Charity



Turn over

1 Work out:

$£15 + £1.05 + 60p + £120 + 9p$

Answer £

[1]

2 You buy these items.






- printer paper £5
- envelopes £1.25
- paperclips 40p

Work out the total cost.

Answer £

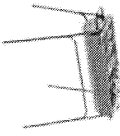



[1]

- 3 You have £40 to spend. You want to see one of these shows. How much money would you have left if you bought tickets for the cheapest show?

Theatre Special Offers		View All Special Offers >>
	Muriels Party Our Price: £39.50	Book Tickets
	Billy Elliot Our Price: £42.50	Book Tickets
	Blood Brothers Our Price: £27.50	Book Tickets
	Chicago Our Price: £53.50	Book Tickets
	Chicago Discount Tickets Our Price: £44.00	Book Tickets

Answer £

- 4 What is the difference in price between the cheapest and most expensive barbeque?

	Heddon Oven Charcoal BBQ	Reserve a now	£25.99
	Chicago BBQ Smoker, Park - 5 Burner	Reserve a now	£19.99
	Copa Charcoal BBQ	Reserve a now	£59.99
	Kenshi Charcoal BBQ	Reserve a now	£39.99

[1]

Answer £

[1]

5 Work out:

$$£3.20 \times 5$$

Answer £

[1]

6 You buy 7 packs of burgers, each costing £3.55.

How much do you pay?

Answer £

[1]

7 Work out:

$$£26.72 \div 4$$

Answer £

[1]

8 A ferry journey costs £52.80.

Five people share this cost equally.

How much does each person pay?

Answer £

[1]

BLANK PAGE

PLEASE DO NOT WRITE ON THIS PAGE

END OF QUESTION PAPER

